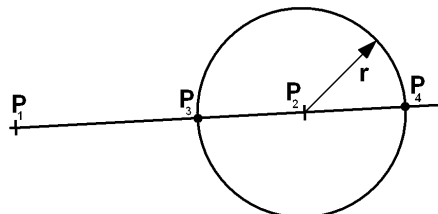


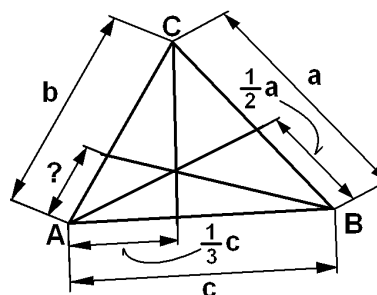
Übungen in AlgGeo ◊ Exercices en AlgGéo ◊ T. B1 ◊ I / 12

Probl. 1 $P_1 = P_1(2, 3)$, $P_2 = P_2(10, 5)$

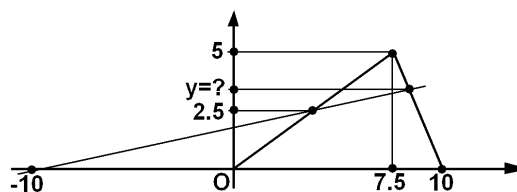


Probl. 2 (a) $f(r) = (P_1P_2P_3P_4)(r) = ?$

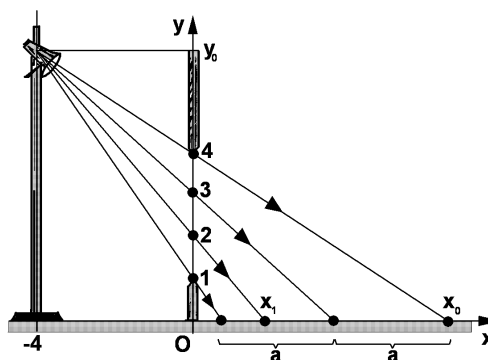
(b) $(P_1P_2P_3P_4)(r) = -1 \Rightarrow r = ?$
 Beispiel? • *Exemple?*



Probl. 3 $y = ?$



Probl. 4 $x_0 = ?$
 $y_0 = ?$
 $x_1 = ?$
 $a = ?$



Probl. 5 Zeichne H , U , S und berechne die Koordinaten.

• *Dessiner H , U , S et calculer les coordonnées.*

WIR

